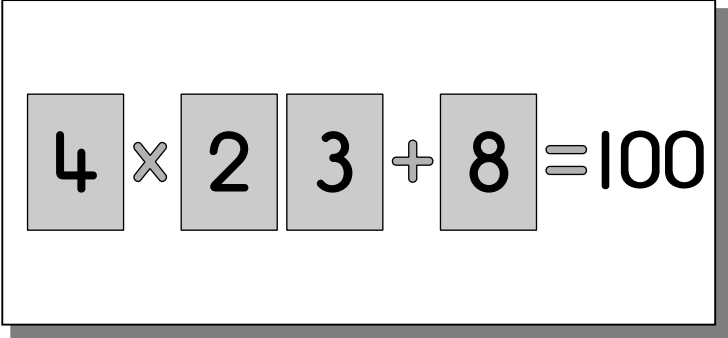


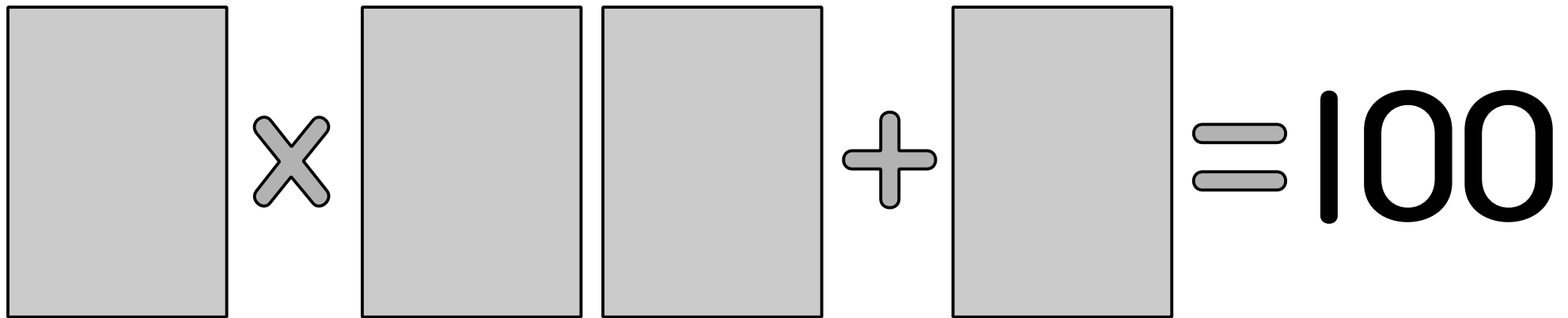
# —Make 100—

---

You need one set of small number cards.

- Place a card on each of the boxes to make the number sentence correct. One way is shown on the right.
- Record as many ways as you can to make 100.


$$\boxed{4} \times \boxed{2} \boxed{3} + \boxed{8} = 100$$

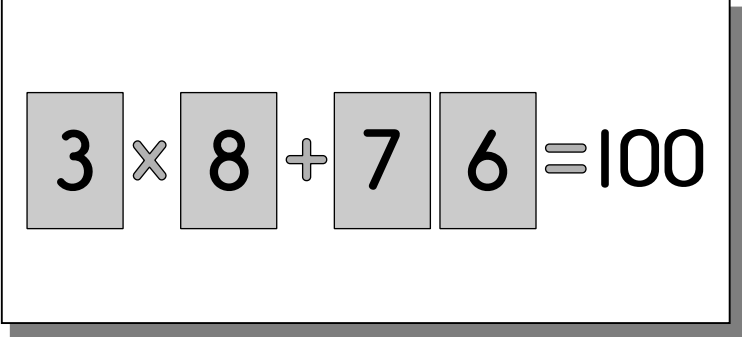

$$\square \times \square \square + \square = 100$$

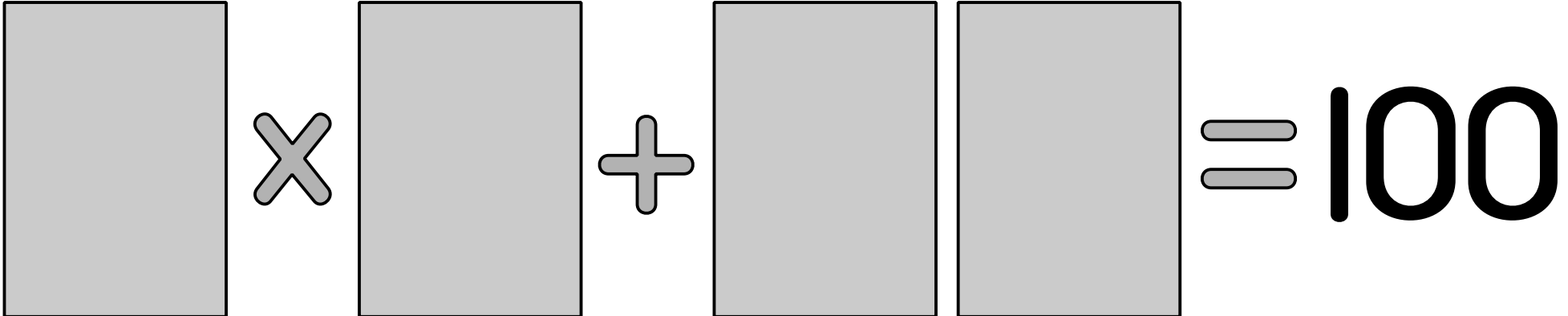
# — Make 100 Again —

---

You need one set of small number cards.

- Place a card on each of the boxes to make the number sentence correct. One way is shown on the right.
- Record as many ways as you can to make 100.


$$\boxed{3} \times \boxed{8} + \boxed{7} \boxed{6} = 100$$


$$\square \times \square + \square \square = 100$$